

Operations Research

Network Flow Models

Ling-Chieh Kung

Department of Information Management
National Taiwan University

Supply networks



- ▶ Procter & Gamble makes and markets over 300 brands of consumer goods worldwide.
- ▶ In the past, P & G had hundreds of suppliers, over 60 plants, 15 distributing centers, and over 1000 consumer zones.
- ▶ Managing item flows over the huge **supply network** is challenging!
 - ▶ An LP/IP model helps.
 - ▶ The special structure of **network transportation** must also be utilized.
- ▶ \$200 million are saved after an OR study!
- ▶ Read the application vignette in Section 8.1 and the article on CEIBA.

Network flow models

- ▶ A lot of operations are to **transport** items on a **network**.
 - ▶ Moving materials from suppliers to factories.
 - ▶ Moving goods from factories to distributing centers.
 - ▶ Moving goods from distributing centers to retail stores.
 - ▶ Sending passengers through railroads or by flights.
 - ▶ Sending data packets on the Internet.
 - ▶ Sending water through pipelines.
 - ▶ And many more.
- ▶ A unified model, the **minimum cost network flow** (MCNF) model, covers many network operations.
- ▶ It has some very nice theoretical properties.
- ▶ It can also be used for making decisions regarding inventory, project management, job assignment, facility location, etc.

Road map

- ▶ **MCNF problems.**
- ▶ An LP formulation for MCNF.
- ▶ Special network flow models.

Networks

- ▶ A **network** (graph) has **nodes** (vertices) and **arcs** (edges/links).
 - ▶ A typical interpretation: Nodes are locations and arcs are roads.

- ▶ Arcs may be **directed** or **undirected**.
 - ▶ For an arc from u to v : (u, v) if directed and $[u, v]$ if undirected.
 - ▶ In this lecture, all arcs are directed.
 - ▶ A network is directed if its arcs are directed.
 - ▶ An undirected network is also called a graph (by some people).

Paths and cycles

- ▶ A **path** (route) from node s to node t is a set of arcs

$$(s, v_1), (v_1, v_2), \dots, (v_{k-1}, v_k), \text{ and } (v_k, t)$$

such that s and t are **connected**.

- ▶ s is called the **source** and t is called the **destination** of the path.
- ▶ Direction matters!
- ▶ A **cycle** (equivalent to circuit in some textbooks) is a path whose destination node is the source node.
- ▶ A path is a **simple path** if it is not a cycle.
- ▶ A network is an **acyclic network** if it contains no cycle.

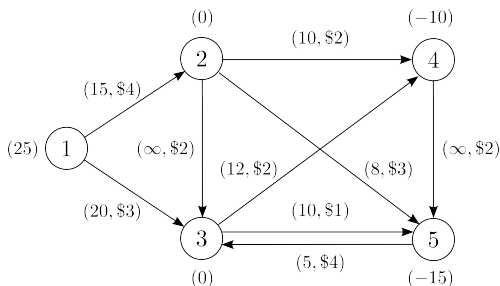
Flows, weights, capacities

- ▶ A **flow** on an arc is the action of sending some items through the arc.
 - ▶ The number of units sent is called the **flow size**.
- ▶ A **network flow** is the collection of all arc flows.
 - ▶ A network flow is just a plan for making flows on all arcs.
- ▶ An arc may have a **weight**.
 - ▶ A weight may be a distance, a cost per unit flow, etc.
- ▶ A **weighted network** is a network whose arcs are weighted.
- ▶ An arc may have a **capacity** constraint.
 - ▶ There may be an upper bound and/or an lower bound (typically 0) for its flow size.
- ▶ A network is **capacitated** if there is an arc having capacity limits.

Minimum cost network flow problem

- ▶ Consider a weighted capacitated network $G = (V, E)$.
 - ▶ G is the network, V is the set of nodes, and E is the set of arcs.
- ▶ For node $i \in V$, there is a **supply quantity** b_i .
 - ▶ $b_i > 0$: i is a **supply** node.
 - ▶ $b_i < 0$: i is a **demand** node.
 - ▶ $b_i = 0$: i is a **transshipment** node.
 - ▶ $\sum_{i \in V} b_i = 0$: Total supplies equal total demands.
- ▶ For arc $(i, j) \in E$, the weight $c_{ij} \geq 0$ is the **cost** of each unit of flow.
- ▶ How to **satisfy all demands** by sending a **minimum-cost** flow from supplies?
- ▶ This is called the minimum cost network flow (MCNF) problem.

An example



- ▶ For each node i , the label (b_i) means its supply quantity is b_i .
 - ▶ One supply node, two demand nodes, and two transshipment nodes.
- ▶ For each arc (i, j) , the label (u_{ij}, c_{ij}) means its upper bound of flow size is u_{ij} and its unit cost of flow is c_{ij} .
 - ▶ Some arcs may have unlimited capacity.
 - ▶ Between two nodes there may be two arcs of different directions.
- ▶ Any **feasible flow**?

Road map

- ▶ MCNF problems.
- ▶ **An LP formulation for MCNF.**
- ▶ Special network flow models.

Formulating the MCNF problem

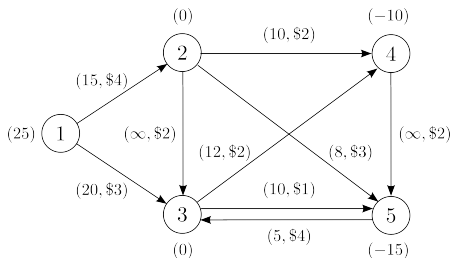
- Decision variables: let

$$x_{ij} = \text{flow size of arc } (i, j)$$

for all $(i, j) \in E$.

- Objective function:

$$\min 4x_{12} + 3x_{13} + \dots + 2x_{45}.$$



- Capacity** constraints: $x_{12} \leq 15$, $x_{13} \leq 20$, ..., $x_{53} \leq 5$.
- Flow balancing** constraints:
 - Supply node: $25 = x_{12} + x_{13}$.
 - Transshipment nodes: $x_{12} = x_{23} + x_{24} + x_{25}$, $x_{13} + x_{23} + x_{53} = x_{34} + x_{35}$.
 - Demand nodes: $x_{24} + x_{34} = x_{45} + 10$, $x_{25} + x_{35} + x_{45} = x_{53} + 15$.
- Flow balancing constraints ensure that all demands are satisfied.
- That total supplies equal total demands is required for feasibility.

An LP formulation

- ▶ Collectively, the complete formulation is

$$\begin{array}{rcl}
 \min & 4x_{12} + 3x_{13} + 2x_{23} + 2x_{24} + 3x_{25} + 2x_{34} + x_{35} + 2x_{45} + 4x_{53} & \\
 \text{s.t.} & x_{12} + x_{13} & = 25 \\
 & -x_{12} + x_{23} + x_{24} + x_{25} & = 0 \\
 & -x_{13} - x_{23} + x_{34} + x_{35} - x_{53} & = 0 \\
 & -x_{24} - x_{34} + x_{45} & = -10 \\
 & -x_{25} - x_{35} - x_{45} + x_{53} & = -15 \\
 & 0 \leq x_{ij} \leq u_{ij} \quad \forall (i, j) \in E. &
 \end{array}$$

- ▶ Model size:
 - ▶ The number of nodes is the number of equality constraints.
 - ▶ The number of arcs is the number of variables.
- ▶ In each column, there are **exactly** one 1 and one -1 !
 - ▶ Is this always true? Why?

Integers for free!

- ▶ Our knowledge suggests that flow sizes should not be set to integers.
- ▶ We use integer variables only when:
 - ▶ Approximation by rounding is too inaccurate.
 - ▶ Binary variables are required for modeling complicated situations.
- ▶ What if we must get an integer solution?
- ▶ For MCNF problems, we will get integer solutions **for free**.
 - ▶ As long as supply quantities and upper bounds are all integers, the solution of the LP for MCNF must be an **integer solution**.
 - ▶ For MCNF, the LP relaxation of the IP formulation always gives an integer solution (if it is feasible).
- ▶ This is because the coefficient matrix is very special.

Totally unimodular matrices

- ▶ We start with the definition of **unimodular matrices**:

Definition 1 (Unimodular matrices)

A square matrix is unimodular if its determinant is 1 or -1.

- ▶ Now we define **totally unimodular matrices**:

Definition 2 (Totally unimodular matrices)

A matrix is totally unimodular (TU) if all its square submatrices are either singular or unimodular.

- ▶ Example:

$$A = \begin{bmatrix} 1 & 0 & -1 & 0 \\ 0 & -1 & 0 & 1 \\ -1 & 0 & 1 & 0 \end{bmatrix} \text{ is TU but } B = \begin{bmatrix} 1 & 0 & 1 \\ 0 & 1 & 1 \\ 1 & 1 & 0 \end{bmatrix} \text{ is not.}$$

Why totally unimodular matrices?

- ▶ Total unimodularity gives us integer solutions!

Proposition 1

For a standard form LP $\min\{c^T x \mid Ax = b, x \geq 0\}$, if A is totally unimodular and $b \in \mathbb{Z}^m$, then an optimal bfs x^ obtained by the simplex method must satisfy $x^* \in \mathbb{Z}^n$.*

Proof. The bfs associated with a basis B is $x = (x_B, x_N) = (A_B^{-1}b, 0)$. To show that x_B are integers, we apply a fact from Linear Algebra:

$$x_B = A_B^{-1}b = \frac{1}{\det A_B} A_B^{\text{adj}} b,$$

where A_B^{adj} is the adjugate matrix of A_B (i.e., $(A_B^{\text{adj}})_{ij}$ is the determinant of the matrix obtained by removing row j and column i from A_B). If A is totally unimodular, $\det A_B$ will be either 1 or -1 for any basis B . x_B is then an integer vector if b is an integer vector. \square

Implications for IPs

- ▶ So if a standard form LP has a totally unimodular coefficient matrix, an optimal bfs reported by the simplex method will always be integer.
- ▶ So if a standard form **IP** has a totally unimodular coefficient matrix, its **LP relaxation** always gives an integer solution.
 - ▶ The branch-and-bound tree will have **only one node**.
 - ▶ Showing the coefficient matrix is totally unimodular is very helpful!
- ▶ In general, the way to design a good algorithm for **solving** a problem always starts from **analyzing** the problem.

Sufficient condition for total unimodularity

- ▶ So how about our MCNF problem?
- ▶ We rely on a very useful sufficient condition for total unimodularity:

Proposition 2

For matrix A , if

- ▶ *all its elements are either 1, 0, or -1 ,*
 - ▶ *each column contains at most two nonzero elements, and*
 - ▶ *rows can be divided into two groups so that for each column two nonzero elements are in the same group if and only if they are different,*
- then A is totally unimodular.*

Proof. By induction on the dimension of square submatrices. □

The coefficient matrix of MCNF

- ▶ Recall that our MCNF example was formulated as

$$\begin{array}{rcl}
 \min & 4x_{12} + 3x_{13} + 2x_{23} + 2x_{24} + 3x_{25} + 2x_{34} + x_{35} + 2x_{45} + 4x_{53} & \\
 \text{s.t.} & x_{12} + x_{13} & = 25 \\
 & -x_{12} + x_{23} + x_{24} + x_{25} & = 0 \\
 & -x_{13} - x_{23} + x_{34} + x_{35} - x_{53} & = 0 \\
 & -x_{24} - x_{34} + x_{45} & = -10 \\
 & -x_{25} - x_{35} - x_{45} + x_{53} & = -15 \\
 & 0 \leq x_{ij} \leq u_{ij} \quad \forall (i, j) \in E. &
 \end{array}$$

- ▶ If $u_{ij} = \infty$, the coefficient matrix fits the sufficient condition.
 - ▶ The coefficient matrix is thus totally unimodular.
 - ▶ A solution generated by the simplex method is thus integer.
- ▶ If $u_{ij} < \infty$, some more arguments are needed.

Proposition 3

For any MCNF problem that is feasible, the simplex method reports an integer solution.

Road map

- ▶ MCNF problems.
- ▶ An LP formulation for MCNF.
- ▶ **Special network flow models.**

MCNF is more than MCNF

- ▶ Here we will show that many well-known problems are all special cases of the MCNF problem.
 - ▶ Transportation problems.
 - ▶ Assignment problems.
 - ▶ Transshipment problems.
 - ▶ Maximum flow problems.
 - ▶ Shortest path problems.
- ▶ If a given problem can be formulated as one of the above, it is solved.
 - ▶ Each of these problems can be solved by some special algorithms.
 - ▶ All we need to know is: They can all be solved by the simplex method.

Transportation problems

- ▶ A firm owns n factories that supply one product in m markets.
 - ▶ The capacity of factory i is s_i ,
 $i = 1, \dots, n$.
 - ▶ The demand of market j is d_j ,
 $j = 1, \dots, m$.
- ▶ Between factory i and market j , there is a route.
 - ▶ The unit cost for shipping one unit from factory i to market j is c_{ij} .
- ▶ How to produce and ship the product to fulfill all demands while minimizing the total costs?

Transportation problems

- ▶ Suppose $\sum_{i=1}^n s_i = \sum_{j=1}^m d_j$.
- ▶ Let x_{ij} be the shipping quantity on arc (i, j) , $i = 1, \dots, n$, $j = 1, \dots, m$.
- ▶ This is an MCNF problem:
 - ▶ Factories are supply nodes whose supply quantity is s_i .
 - ▶ Markets are demand nodes whose supply quantity is $-d_j$.
 - ▶ No transshipment nodes.
 - ▶ Arc weights are unit transportation costs c_{ij} .
 - ▶ Arcs have unlimited capacities.

Variants of transportation problems

- ▶ What if $\sum_{i=1}^n s_i > \sum_{j=1}^m d_j$?
 - ▶ Let's create a "virtual market" (labeled as market 0) whose demand quantity is $d_0 = \sum_{i=1}^n s_i - \sum_{j=1}^m d_j$.
 - ▶ Arcs $(i, 0)$ have costs $c_{i,0} = 0$.
 - ▶ Shipping to market 0 just means some factory capacities are unused.
- ▶ What if different factories have different unit production costs c_i^P ?
 - ▶ c_{ij} is updated to $c_{ij} + c_i^P$.
 - ▶ E.g., cases with outside suppliers.
- ▶ What if different markets have different unit retailing costs c_i^R ?
 - ▶ c_{ij} is updated to $c_{ij} + c_i^R$.
 - ▶ E.g., countries have different tariffs.

Assignment problems

- ▶ A manager is assigning n jobs to n workers.
- ▶ The assignment must be one-to-one.
 - ▶ A job cannot be split.
- ▶ The cost for worker j to complete job i is c_{ij} .
- ▶ How to minimize the total costs?
- ▶ This is actually a special case of the transportation problem!
 - ▶ Jobs are factories and workers are markets.
 - ▶ Each factory produces one item and each market demands one item.
 - ▶ The cost of shipping one item from factory i to market j is c_{ij} .
- ▶ What if there are fewer workers than jobs?

IP formulations

- ▶ Let I and J be the sets of factories/jobs and markets/workers.
- ▶ For the transportation problem: ▶ For the assignment problem:

$$\begin{aligned}
 \min \quad & \sum_{i \in I} \sum_{j \in J} c_{ij} x_{ij} \\
 \text{s.t.} \quad & \sum_{j=1}^m x_{ij} = s_i \quad \forall i \in I \\
 & \sum_{i=1}^n x_{ij} = d_j \quad \forall j \in J \\
 & x_{ij} \in \mathbb{Z}_+ \quad \forall i \in I, j \in J.
 \end{aligned}$$

$$\begin{aligned}
 \min \quad & \sum_{i \in I} \sum_{j \in J} c_{ij} x_{ij} \\
 \text{s.t.} \quad & \sum_{j=1}^m x_{ij} = 1 \quad \forall i \in I \\
 & \sum_{i=1}^n x_{ij} = 1 \quad \forall j \in J \\
 & x_{ij} \in \{0, 1\} \quad \forall i \in I, j \in J.
 \end{aligned}$$

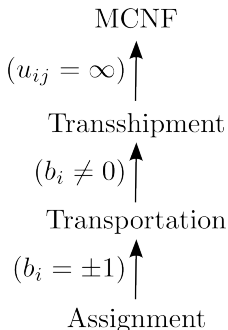
- ▶ For TU, put rows for I in one group and rows in J in the other.
- ▶ Relaxing the integer constraint is critical for the assignment problem!

Transshipment problems

- ▶ If there are transshipment nodes in a transportation problem, the problem is called a transshipment problem.
- ▶ It is just an MCNF problem with unlimited arc capacities.

General MCNF
formulation:

$$\begin{aligned} \min \quad & c^T x \\ \text{s.t.} \quad & Ax = b \\ & x \leq u \\ & x \geq 0. \end{aligned}$$



Shortest path problems

- ▶ For a given network on which each arc has a weight d_{ij} as a distance, what is the shortest path to go from a given source node s to a given destination node t ?
 - ▶ Let's assume that $d_{ij} \geq 0$ in this course.

- ▶ How is a shortest path problem an MCNF problem?
- ▶ We simply ask how to send one unit from s to t with the minimum cost, where arc costs are just arc distances.
 - ▶ One supply node s and one demand node d .
 - ▶ All other nodes are transshipment nodes.
 - ▶ The supply and demand quantities are both 1.

IP formulation

- ▶ Let T be the set of transshipment nodes.
- ▶ For the shortest path problem:

$$\begin{aligned} \min \quad & \sum_{i \in I} \sum_{j \in J} d_{ij} x_{ij} \\ \text{s.t.} \quad & \sum_{(s,j) \in E} x_{sj} = 1 \\ & \sum_{(i,t) \in E} x_{it} = 1 \\ & \sum_{(i,k) \in E} x_{ik} - \sum_{(k,j) \in E} x_{kj} = 0 \quad \forall k \in T \\ & x_{ij} \in \{0, 1\} \quad \forall (i, j) \in E. \end{aligned}$$

- ▶ For TU, group rows for s and T and leave the row for t alone.
- ▶ Relaxing the integer constraint is critical for the shortest path problem!

Maximum flow problems

- ▶ For a network whose arcs have capacities but no cost, how many units may we send from a given source node s to a given destination node t ?

- ▶ How is a maximum flow problem an MCNF problem?
 - ▶ We want to send as many units as possible.
 - ▶ We solve a maximization problem, not a minimization one.
- ▶ We try to send units from t to s to “pay negative costs”.
 - ▶ All original arcs have their capacities and no cost.
 - ▶ The added arc from t to s has unlimited capacity and cost -1 .
 - ▶ All nodes are transshipment nodes.

IP formulation

- ▶ Let x_{ts} be the flow size of the added arc (t, s) .
 - ▶ Let $c_{ts} = -1$ be the unit cost.
- ▶ For the maximum flow problem:

$$\begin{aligned} \min \quad & -x_{ts} \\ \text{s.t.} \quad & \sum_{(i,k) \in E} x_{ik} - \sum_{(k,j) \in E} x_{kj} = 0 \quad \forall k \in V \\ & x_{ij} \leq u_{ij} \quad \forall (i,j) \in E \\ & x_{ij} \in \mathbb{Z}_+ \quad \forall (i,j) \in E. \end{aligned}$$

Reduction map

